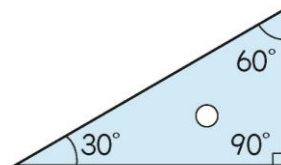
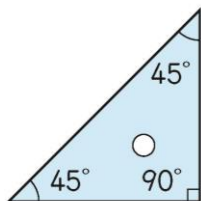
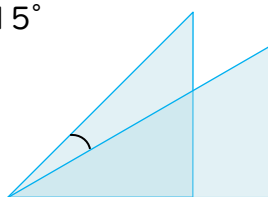


2つの三角定規でできる角度は？

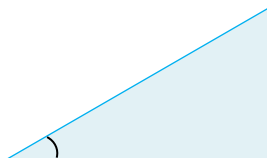
三角定規の角度



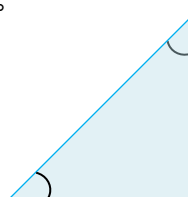
15°



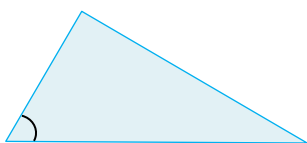
30°



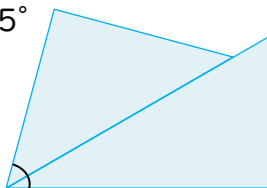
45°



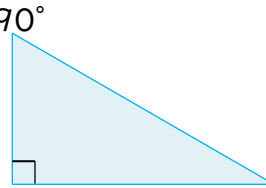
60°



75°




90°




2つの三角定規を組み合わせてもっと角度をつくろう！


105°




120°



150°



180°



——— もっと広がる算数 ———

どこの角度が165°になっているか
分度器ぶんどきを使って調べてみましょう。

